


MUSTERKLAUSUR


ALLGEMEINE MUSIKLEHRE POPULARMUSIK

1. Aufgabe: Ergänzen Sie zu vollständigen Akkorden:
(der gegebene ist der tiefste Ton)




A musical staff in 4/4 time with a treble clef. The first measure contains a single bass note (F2). The second measure is empty. The third measure contains a single treble note (F4).

2. Aufgabe: Benennen Sie folgende Akkorde:



A musical staff in 4/4 time with a treble clef. The first measure contains a chord with notes F4, A4, and C5. The second measure contains a chord with notes F4, A4, and C5. The third measure contains a chord with notes F4, A4, and C5.


3. Aufgabe: Notieren Sie über das Notensystem die Akkordsymbole eines Turnarounds in ___G-Dur___:



A musical staff in G major with a treble clef, containing four measures of diagonal lines representing a turnaround.

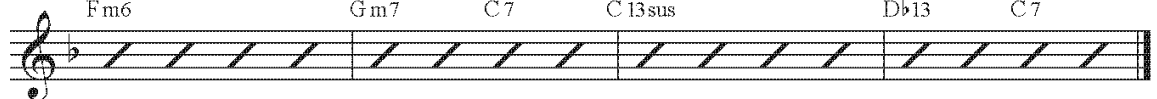
4. Aufgabe: Analysieren Sie den folgenden Ausschnitt eines Jazz-Standards ("Day Dream"), indem Sie mit Hilfe von Stufensymbolen Zusammenhänge herstellen!

F maj7 F7 Bb7 A7 Dm7 F7 Bbm6 C7



A musical staff in G major with a treble clef, containing four measures of diagonal lines representing a chord progression.

Fm6 Gm7 C7 C13sus Db13 C7



A musical staff in G major with a treble clef, containing four measures of diagonal lines representing a chord progression.